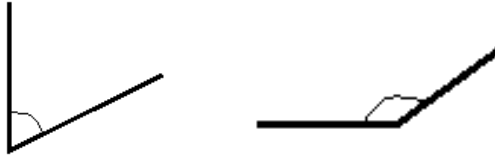


Destination: **BEARINGS**

1. Measure the following angles:



2. Measure the length of these lines:



3. Draw an angle of

a. 63°

b. 128°

320°

READY FOR TAKE-OFF

NAME: _____

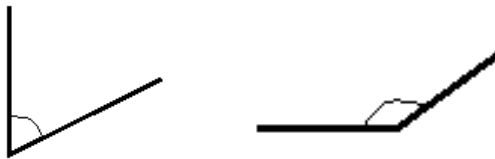
MARKS:

THINGS TO REMEMBER:



Destination: **BEARINGS**

1. Measure the following angles:



2. Measure the length of these lines:



3. Draw an angle of

a. 63°

b. 128°

320°

READY FOR TAKE-OFF

NAME: _____

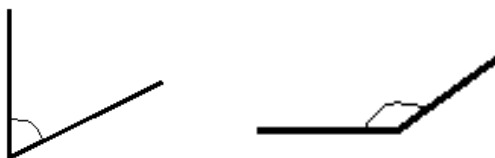
MARKS:

THINGS TO REMEMBER:



Destination: **BEARINGS**

1. Measure the following angles:



2. Measure the length of these lines:



3. Draw an angle of

a. 63°

b. 128°

320°

READY FOR TAKE-OFF

NAME: _____

MARKS:

THINGS TO REMEMBER:

