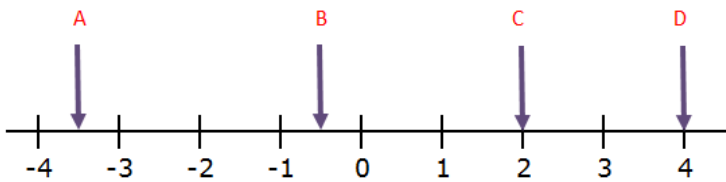


Destination: **INEQUALITIES**

1. What are the values of A, B, C and D on the number line?



2. What do each of the symbols mean:

(i) $>$

(ii) $<$

(iii) \geq

(ii) \leq

READY FOR TAKE-OFF

NAME: _____

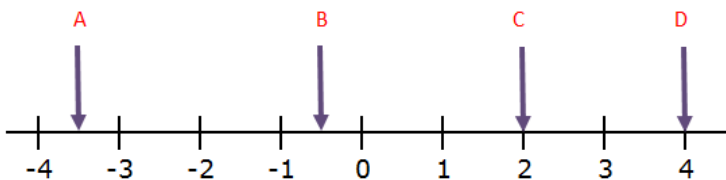
MARKS:

THINGS TO REMEMBER:



Destination: **INEQUALITIES**

1. What are the values of A, B, C and D on the number line?



2. What do each of the symbols mean:

(i) $>$

(ii) $<$

(iii) \geq

(ii) \leq

READY FOR TAKE-OFF

NAME: _____

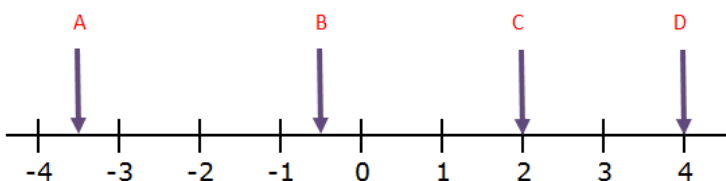
MARKS:

THINGS TO REMEMBER:



Destination: **INEQUALITIES**

1. What are the values of A, B, C and D on the number line?



2. What do each of the symbols mean:

(i) $>$

(ii) $<$

(iii) \geq

(ii) \leq

READY FOR TAKE-OFF

NAME: _____

MARKS:

THINGS TO REMEMBER:

