

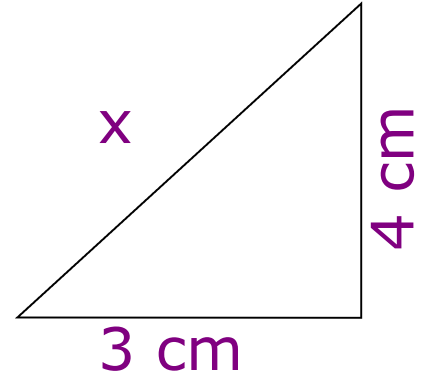


★ Estimate 9.8×47

★ Solve $2x + 3 = 19$

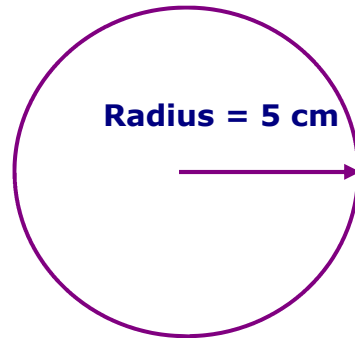
★ Calculate x

★ 10% of £85



★ $\frac{1}{5} + \frac{2}{5}$

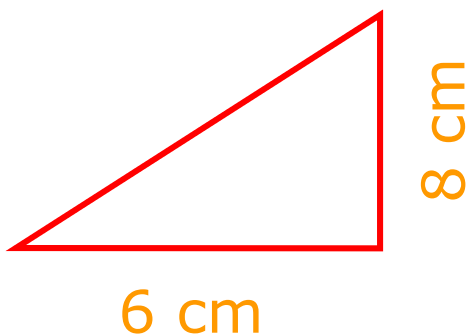
★ Work out the area



★ Simplify $m^3 \times m^5$


★ £1 = \$1.25
Convert £620 to \$

★ What is the area?



★ Calculate

$$\frac{1}{1.5 + 2.45}$$



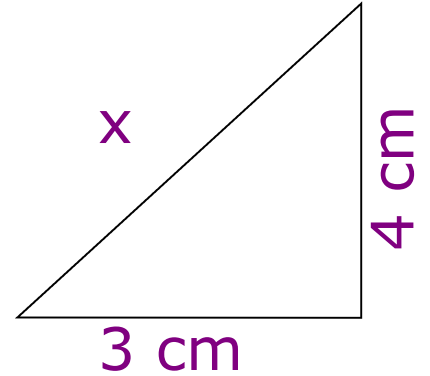


★ Estimate 9.8×47

★ Solve $2x + 3 = 19$

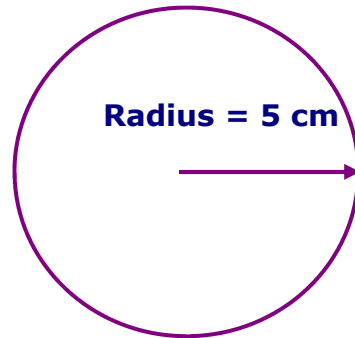
★ Calculate x

★ 10% of £85



★ $\frac{1}{5} + \frac{2}{5}$

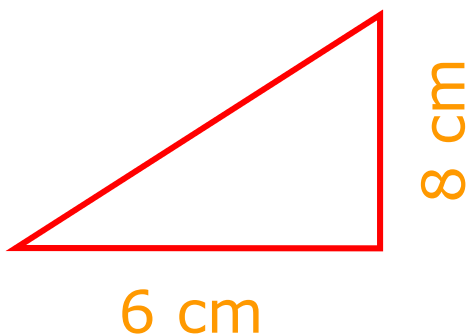
★ Work out the area



★ Simplify $m^3 \times m^5$

★ £1 = \$1.25
Convert £620 to \$

★ What is the area?



★ Calculate

$$\frac{1}{1.5 + 2.45}$$

