



Write 155 in standard form

★ What is the mode
2 4 2 5 3 2



There are 300 people in a cinema.

$\frac{1}{3}$ of them are boys.

3

$\frac{2}{5}$ of them are girls.



If $x = -2$ and $y = 3$,
work out

$$4x + 3y$$

The rest are adults. How many adults are there?

★ What is the probability of an "e" in the word "probability"?

What are the next 2 terms?



What is 2^3 ?




11 7 3 — —




Solve $2x - 4 \geq 12$

★ What is the size of an interior angle of a regular pentagon?



$\frac{2}{9}$ of 45





Write 155 in standard form

★ What is the mode
2 4 2 5 3 2



There are 300 people in a cinema.

$\frac{1}{3}$ of them are boys.

3

$\frac{2}{5}$ of them are girls.



If $x = -2$ and $y = 3$,
work out

$$4x + 3y$$

The rest are adults. How many adults are there?

★ What is the probability of an "e" in the word "probability"?

What are the next 2 terms?



What is 2^3 ?




11 7 3 — —



Solve $2x - 4 \geq 12$

★ What is the size of an interior angle of a regular pentagon?



$\frac{2}{9}$ of 45

