

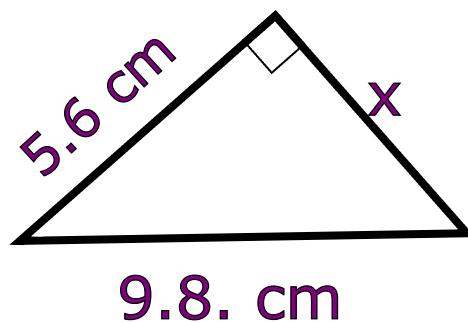


★ **Solve**  $2x + 1 = 8$

★ **Calculate**  $x$

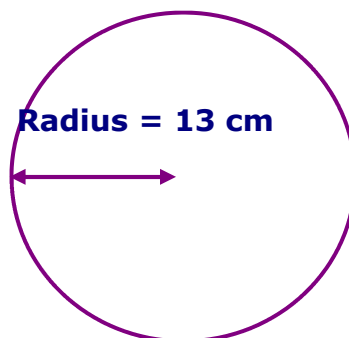
★ **Estimate**  $19.9 \div 5.42$

★ **35% of £120**



★  $\frac{3}{4} + \frac{2}{3}$

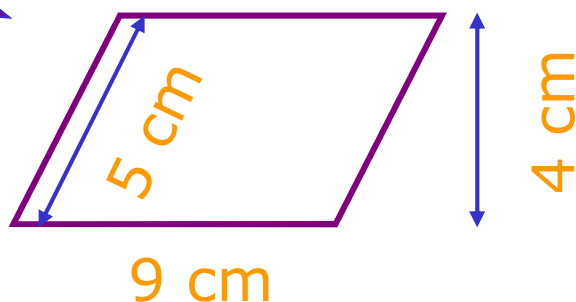
★ **Work out the circumference**



★ **Simplify**  $2ab \times 3b$

★  $\text{£}1 \text{ is } \$0.58$   
**Convert £138 to \$**

★ **What is the area?**



★ **Calculate**  
 $10^2 - 41$   
 $2.8 \times 1.71$



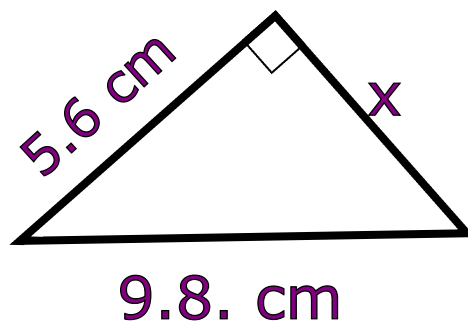


★ **Solve**  $2x + 1 = 8$

★ **Calculate**  $x$

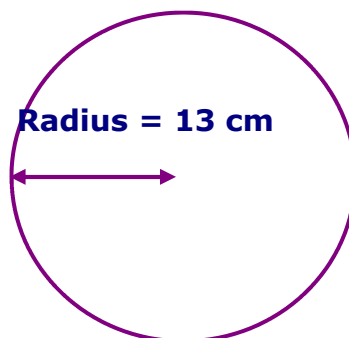
★ **Estimate**  $19.9 \div 5.42$

★ **35% of £120**



★  $\frac{3}{4} + \frac{2}{3}$

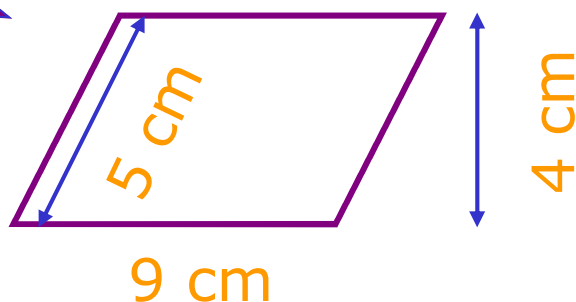
★ **Work out the circumference**



★ **Simplify**  $2ab \times 3b$

★  $\text{£}1 \text{ is } \$0.58$   
**Convert £138 to \$**

★ **What is the area?**



★ **Calculate**  
 $10^2 - 41$   
 $2.8 \times 1.71$

