



Estimate 4.9×31

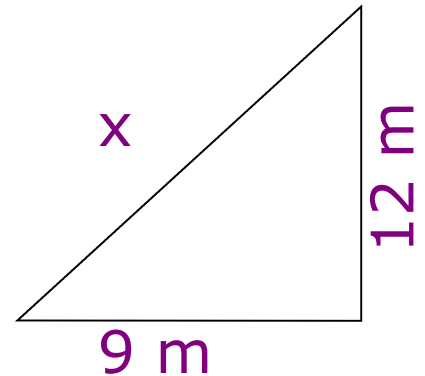
Solve $5x - 4 = 11$



Calculate x



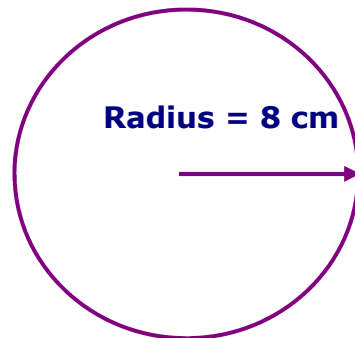
15% of £240



$$\frac{2}{3} - \frac{3}{7}$$



Work out the area



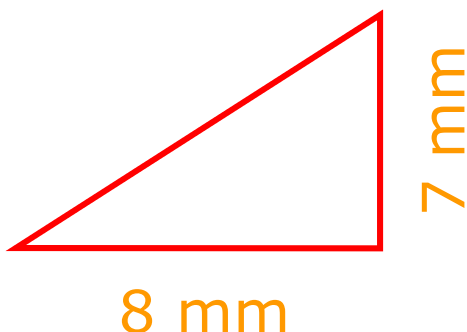
Simplify $m^7 \times m^{-2}$



$$£1 = \$1.25$$

Convert £200 to \$

What is the area?



Calculate

$$\frac{1}{3.25 + 6.75}$$





Estimate 4.9×31

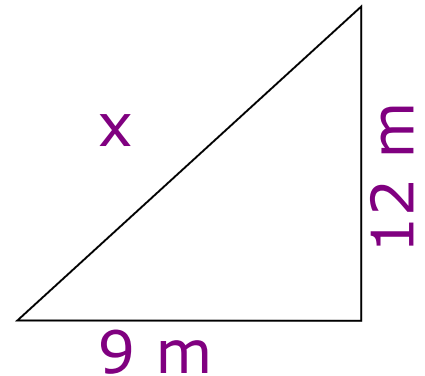
Solve $5x - 4 = 11$



Calculate x



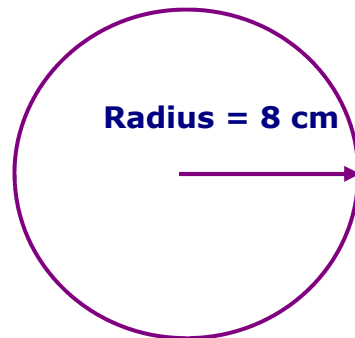
15% of £240



$$\frac{2}{3} - \frac{3}{7}$$



Work out the area



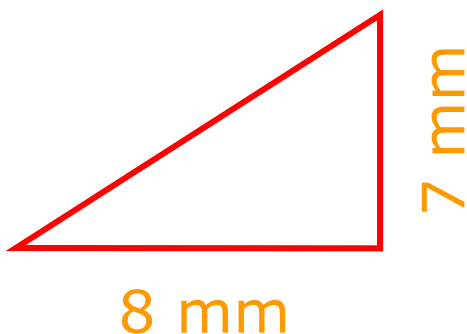
Simplify $m^7 \times m^{-2}$



$$£1 = \$1.25$$

Convert £200 to \$

What is the area?



Calculate

$$\frac{1}{3.25 + 6.75}$$

