



Estimate 19.9×5.42

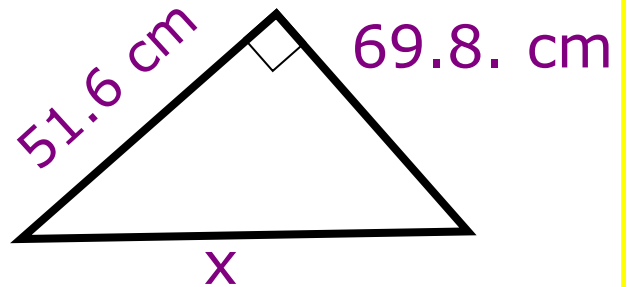
Solve $4x + 1 = 33$



Calculate x



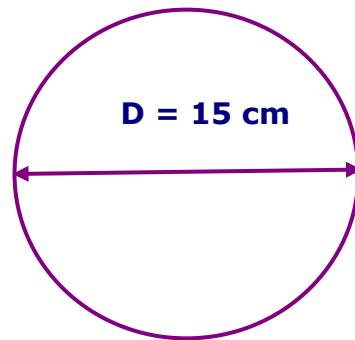
55% of £120



$$\frac{3}{4} - \frac{2}{3}$$



Work out the area

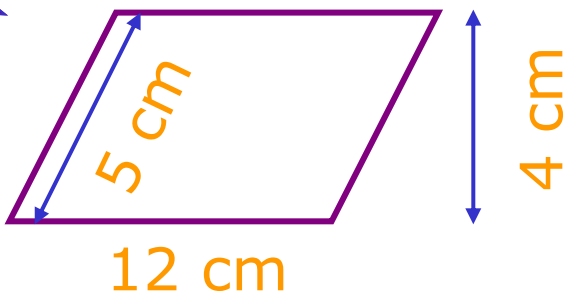


Simplify $2a^2b \times 3b^2$



£1 is \$0.58
Convert \$58 to £

What is the area?



Calculate
 $14^2 + 41$

 2.8×1.71





Estimate 19.9×5.42

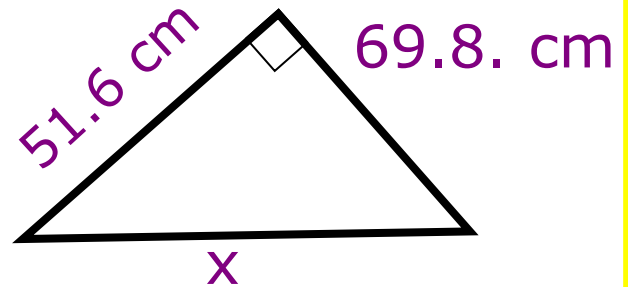
Solve $4x + 1 = 33$



Calculate x



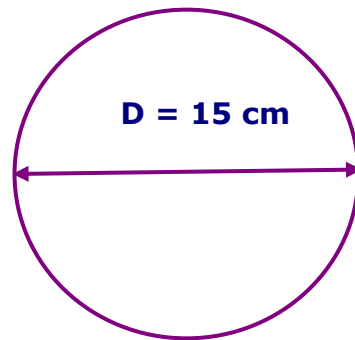
55% of £120



$$\frac{3}{4} - \frac{2}{3}$$



Work out the area



Simplify $2a^2b \times 3b^2$

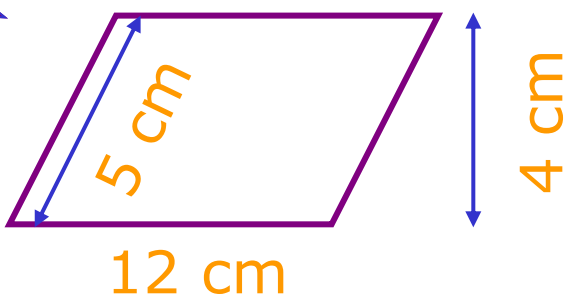


£1 is \$0.58

Convert \$58 to £



What is the area?



Calculate $14^2 + 41$

2.8×1.71

