

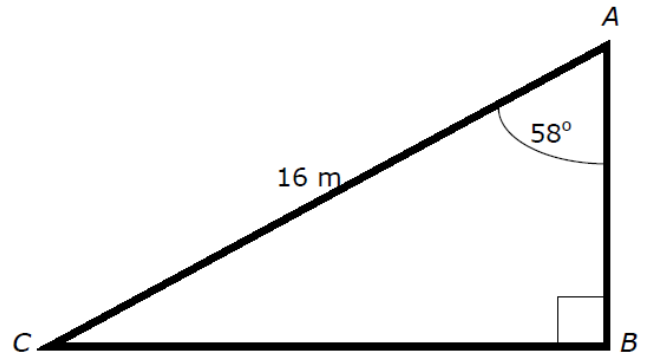


★ Estimate 42.9×5.36

★ Solve $7x - 1 = 41$

★ Find the length AB

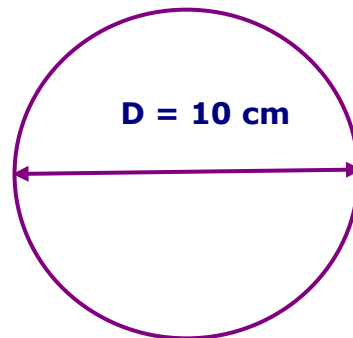
★ 85% of £120



★ $\frac{2}{8} + \frac{2}{3}$

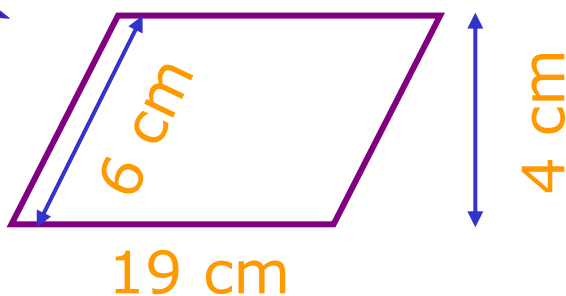
★ Work out the area

★ Simplify $4a^3b \times 4b^2$



★ £1 is \$0.58
Convert £125 to \$

★ What is the area?



★ Calculate $15^2 + 41$
 $12.8 - 1.71$



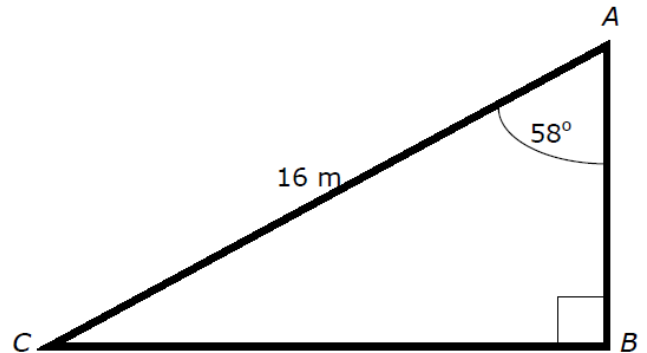


★ Estimate 42.9×5.36

★ Solve $7x - 1 = 41$

★ Find the length AB

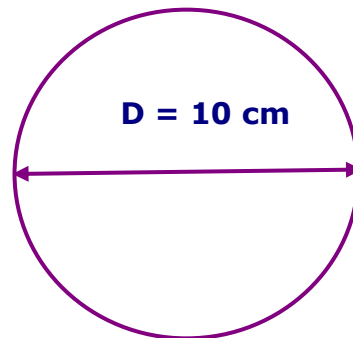
★ 85% of £120



★ $\frac{2}{8} + \frac{2}{3}$

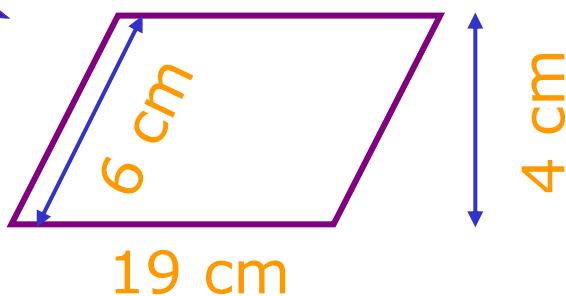
★ Work out the area

★ Simplify $4a^3b \times 4b^2$



★ £1 is \$0.58
Convert £125 to \$

★ What is the area?



★ Calculate $15^2 + 41$
 $12.8 - 1.71$

