

Write **0.0571** in standard form

calculate the range
18 7 3 6 4 2



If $x = 3$ and $y = -3$,
work out

$$2x^2 + y$$



There are 400 people in a cinema.

$\frac{3}{8}$ of them are boys.

8

$\frac{3}{10}$ of them are girls.

The rest are adults. How many adults are there?

What is the probability of club in a pack of cards?

What are the next 2 terms?

What is $\sqrt{81}$?

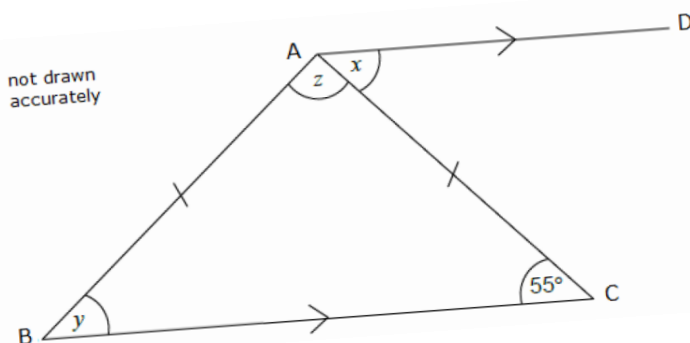
8 5 2




Solve $2(2x - 4) < 24$



What is x , y and z ?



$\frac{2}{7}$ of 49





Write **0.0571** in standard form

calculate the range
18 7 3 6 4 2



There are 400 people in a cinema.

$\frac{3}{8}$ of them are boys.

8

$\frac{3}{10}$ of them are girls.



If $x = 3$ and $y = -3$,
work out

$$2x^2 + y$$

The rest are adults. How many adults are there?

What is the probability of club in a pack of cards?



What is $\sqrt{81}$?

What are the next 2 terms?



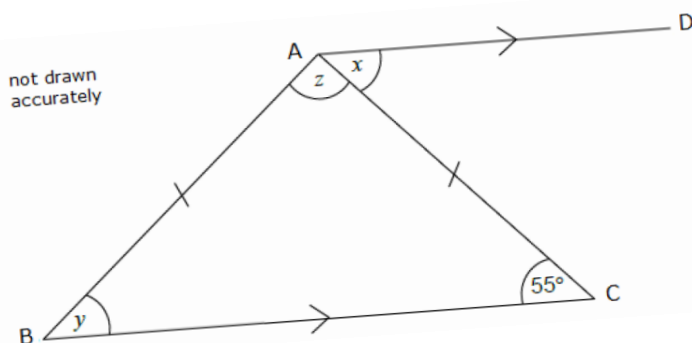
8 5 2



Solve $2(2x - 4) < 24$



What is x , y and z ?



$\frac{2}{7}$ of 49

