

Simplify

$$4t + 5s + t - 3s$$

5.1

★ 48×46



Draw a pie chart to show the results of a survey asking what your favourite sport is. You must include a key.

Football: 20 people

Hockey: 6 People

Tennis: 10 people



★ Expand $3n(2n - 2)$

★ Share £99 in the ratio of 1:5



factorise

$$9x - 27$$

★ Express 72 as a product of prime factors

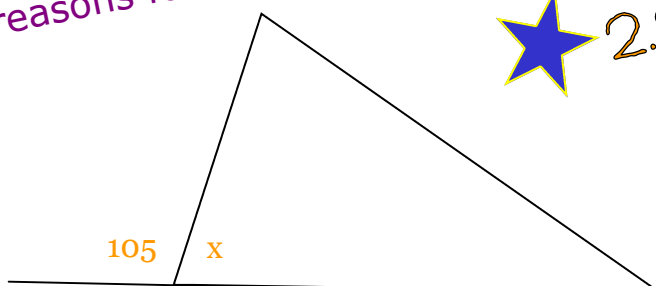


★ Expand $(x - 2)(2x - 3)$




What is x ?

Give reasons for your answer



$$2.89 \times 6.66$$





Simplify

$$4t + 5s + t - 3s$$

★ 48×46



Draw a pie chart to show the results of a survey asking what your favourite sport is. You must include a key.

Football: 20 people

Hockey: 6 People

Tennis: 10 people



★ Expand $3n(2n - 2)$

★ Share £99 in the ratio of 1:5



factorise

$$9x - 27$$



Express 72 as a product of prime factors

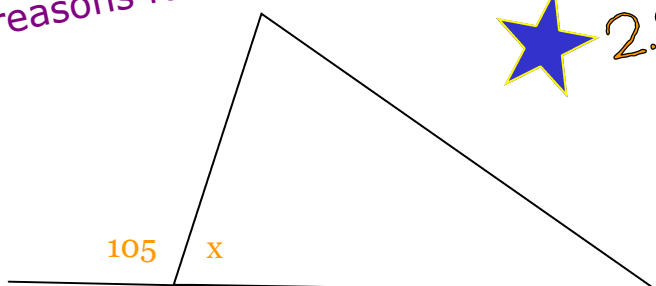


★ Expand $(x - 2)(2x - 3)$



What is x ?

Give reasons for your answer



★ 2.89×6.66

