



Write 27 700 in standard form

calculate the range
2 4 2 5 3 2



There are 240 people in a cinema.

$\frac{1}{6}$ of them are boys.

6

$\frac{3}{10}$ of them are girls.



If $x = 2$ and $y = 3$,
work out

$$9x - y$$

The rest are adults. How many adults are there?

What is the probability of an odd number on a dice?

What are the next 2 terms?



What is m^0 ?

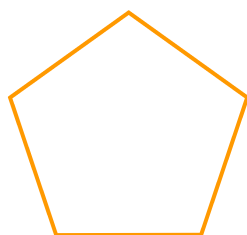


2 4 6 8 10




Solve $3x + 6 \geq 12$

What is the size of an exterior angle of a regular pentagon?



$\frac{3}{8}$ of 64





Write 27 700 in standard form

calculate the range
2 4 2 5 3 2



There are 240 people in a cinema.

$\frac{1}{6}$ of them are boys.

6

$\frac{3}{10}$ of them are girls.



If $x = 2$ and $y = 3$,
work out

$$9x - y$$

The rest are adults. How many adults are there?

What is the probability of an odd number on a dice?

What are the next 2 terms?



What is m^0 ?

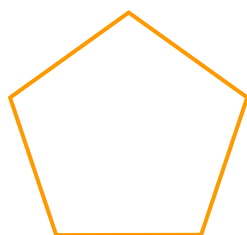


2 4 6 8 10



Solve $3x + 6 \geq 12$

What is the size of an exterior angle of a regular pentagon?



$\frac{3}{8}$ of 64

