



Simplify $5x + y + 2x - y$

★ 97×120



Draw a stem and leaf diagram to show the below information.



Expand $4(2x + 5y)$

35 47 45 99 61 53 38 44

33 52 34 41 50 10 11 38

★ Share £120 in the ratio of 5:1



factorise $x^2 - 9$

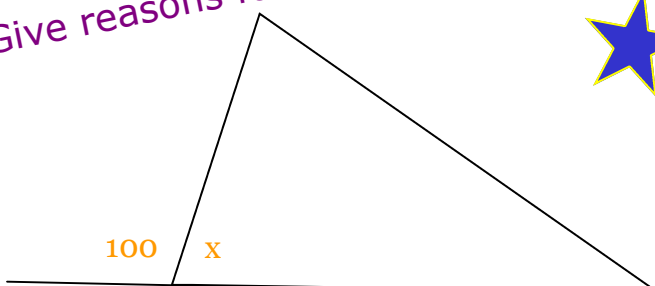
★ Express 96 as a product of prime factors




Expand $(x + 5)(2x + 1)$

★ What is x ?

Give reasons for your answer



2.49×21





★ Simplify $5x + y + 2x - y$

★ 97×120

★ Draw a stem and leaf diagram to show the below information.

★ Expand $4(2x + 5y)$

35 47 45 99 61 53 38 44

33 52 34 41 50 10 11 38

★ Share £120 in the ratio of 5:1

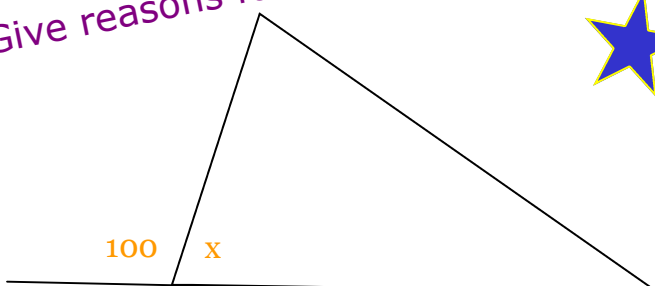
★ Express 96 as a product of prime factors

★ factorise $x^2 - 9$

★ Expand $(x + 5)(2x + 1)$

★ What is x ?

Give reasons for your answer



★ 2.49×21

