



Estimate 1.8×47

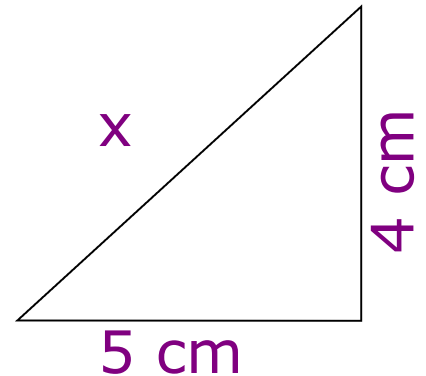
★ **Solve** $5x + 3 = 19$



Calculate x



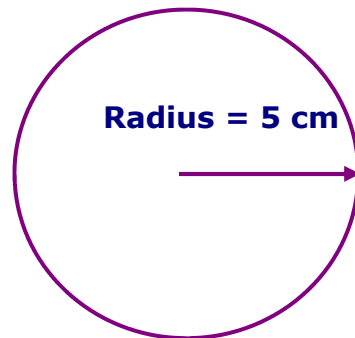
20% of £85



$$\frac{1}{7} + \frac{5}{8}$$



Work out the area



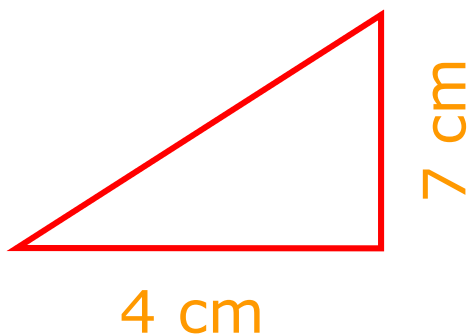
★ **Simplify** $m^3 \div m^4$



$$£1 = \$1.25$$


Convert £760 to \$

★ **What is the area?**



Calculate

$$\frac{1}{1.6 + 4.45}$$





Estimate 1.8×47

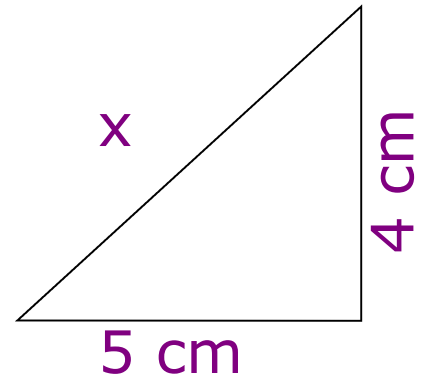
★ **Solve** $5x + 3 = 19$



Calculate x



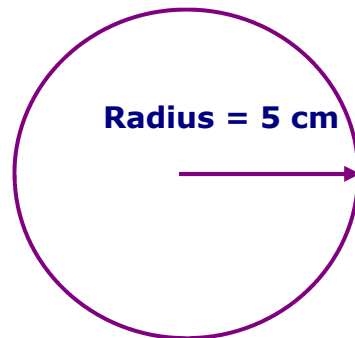
20% of £85



$$\frac{1}{7} + \frac{5}{8}$$



Work out the area



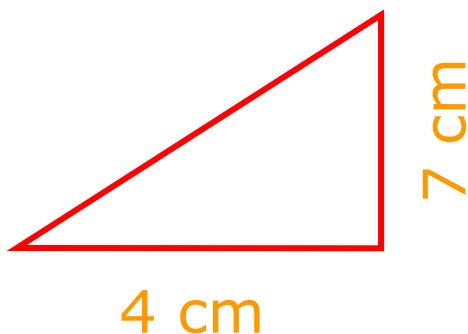
★ **Simplify** $m^3 \div m^4$



$$£1 = \$1.25$$

Convert £760 to \$

★ **What is the area?**



Calculate

$$\frac{1}{1.6 + 4.45}$$

