

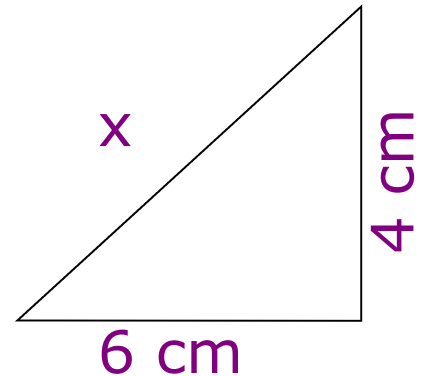


★ **Solve** $4x + 3 = 19$

★ **Estimate** 9.8×47
 $\underline{\hspace{1cm}}$
 0.5

★ **Calculate** x

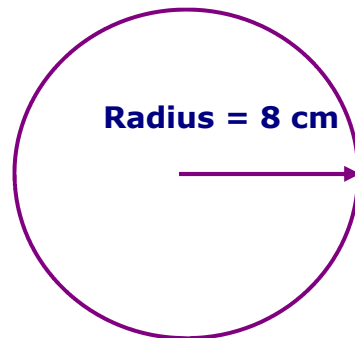
★ **15% of £85**



★ $\frac{1}{5} \times \frac{2}{5}$

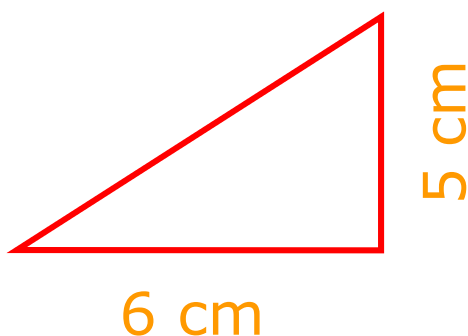
★ **Work out the area**

★ **Simplify** $m^6 \times m^4$



★ $£1 = \$1.26$
Convert £620 to \$

★ **What is the area?**



★ **Calculate**

$\frac{1}{1.2 + 2.35}$



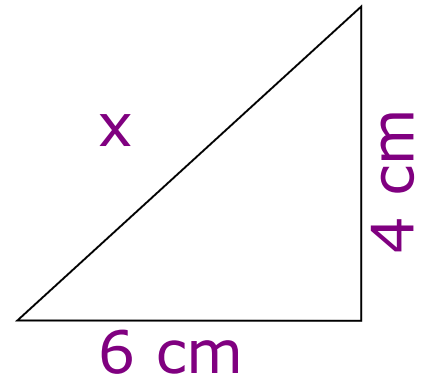


★ **Solve** $4x + 3 = 19$

★ **Estimate** 9.8×47
 $\underline{\hspace{1cm}}$
 0.5

★ **Calculate** x

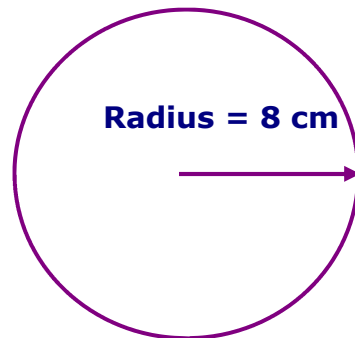
★ **15% of £85**



★ $\frac{1}{5} \times \frac{2}{5}$

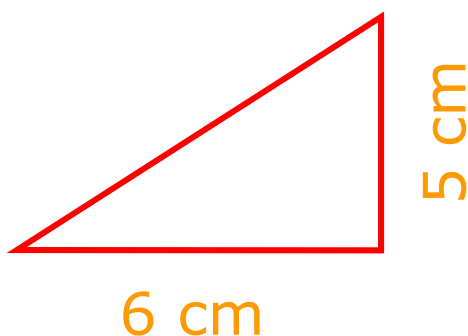
★ **Work out the area**

★ **Simplify** $m^6 \times m^4$



★ $£1 = \$1.26$
Convert £620 to \$

★ **What is the area?**



★ **Calculate**

$\frac{1}{1.2 + 2.35}$

