



Write 15 530 in standard form

★ Calculate the mean  
4 4 3 6 3 2



There are 300 people in a cinema.

$\frac{1}{5}$  of them are boys.

5

$\frac{4}{10}$  of them are girls.

10

The rest are adults. How many adults are there?



If  $x = 6$  and  $y = 4$ ,  
work out

$$4x + 3y$$

★ What is the probability of an odd number on a dice?

What are the next 2 terms?



What is  $100^0$ ?




4 8 12 16 20




Solve  $4x + 6 \geq 12$

★ What is the size of an interior angle of a regular pentagon?



$\frac{6}{8}$  of 48





Write 15 530 in standard form

★ Calculate the mean  
4 4 3 6 3 2



There are 300 people in a cinema.

$\frac{1}{5}$  of them are boys.

5

$\frac{4}{10}$  of them are girls.

10

The rest are adults. How many adults are there?



If  $x = 6$  and  $y = 4$ ,  
work out

$$4x + 3y$$

★ What is the probability of an odd number on a dice?

What are the next 2 terms?



What is  $100^0$ ?




4 8 12 16 20



Solve  $4x + 6 \geq 12$

★ What is the size of an interior angle of a regular pentagon?



$\frac{6}{8}$  of 48

