



**WRITE 0.5 AS
A FRACTION**



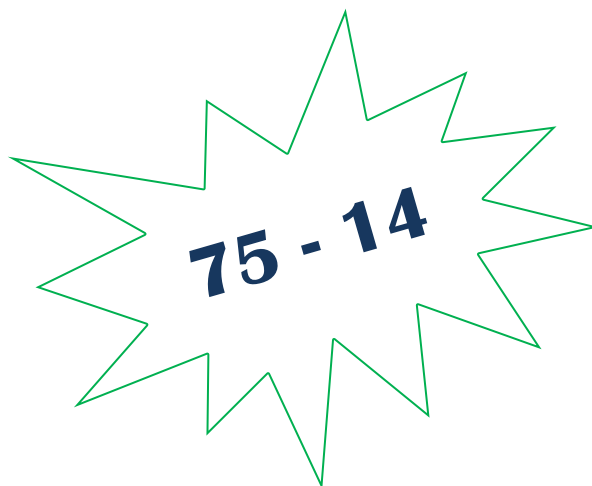
$$3.9 - 1.2$$

What fraction is shaded?



**WHICH OF THE FOLLOWING ARE
PRIME NUMBERS?**

1, 2, 7, 9




**Write 17 as a
fraction of 20**

$$6 \overline{)84}$$

**LIST THE FIRST 5
MULTIPLES OF 2**


WORK OUT: $40 \div 10$

**WRITE 0.5 AS
A FRACTION**



$$3.9 - 1.2$$

What fraction is shaded?



**WHICH OF THE FOLLOWING ARE
PRIME NUMBERS?**

1, 2, 7, 9

$$75 - 14$$

**Write 17 as a
fraction of 20**

$$6 \overline{)84}$$

**LIST THE FIRST 5
MULTIPLES OF 2**

WORK OUT: $40 \div 10$