

| Mathematical Skill   |
|--|
| <b>1. Arithmetic and numerical computation</b>   |
| a) Recognise and use expressions in decimal form   |
| b) Recognise and use expressions in standard form  |
| c) Use ratios, fractions and percentages   |
| d) Make estimates of the results of simple calculations  |
| <b>2. Handling data</b>  |
| a) Use an appropriate number of significant figures  |
| b) Find arithmetic means   |
| c) Construct and interpret frequency tables and diagrams, bar charts and histograms  |
| d) Understand the principles of sampling as applied to scientific data (biology questions only)                                  |
| e) Understand simple probability   |
| f) Understand the terms mean, mode and median  |
| g) Use a scatter diagram to identify a correlation between two variables   |
| h) Make order of magnitude calculations  |
| <b>3. Algebra</b>  |
| a) Understand and use the symbols: =, <>, >, $\propto$ , ~   |
| b) Change the subject of an equation   |
| c) Substitute numerical values into algebraic equations using appropriate units for physical quantities                          |
| d) Solve simple algebraic equations  |
| <b>4. Graphs</b>   |
| a) Translate information between graphical and numeric form  |
| b) Understand that $y = mx + c$ represents a linear relationship   |
| c) Plot two variables from experimental or other data  |
| d) Determine the slope and intercept of a linear graph   |
| e) Draw and use the slope of a tangent to a curve as a measure of rate of change   |
| f) Understand the physical significance of area between a curve and the x-axis and measure it by counting squares as appropriate |
| <b>5. Geometry and trigonometry</b>  |
| a) Use angular measures in degrees   |
| b) Visualise and represent 2D and 3D forms including two dimensional representations of 3D objects                               |
| c) Calculate areas of triangles and rectangles, surface areas and volumes of cubes   |

## Similar Questions Science and Maths GCSE(9-1)

1. (a.) What is the median number of stomata on the upper surface of the leaf?

[1 mark]

- (b.) Calculate the value of X in the table.  
Give your answer to 2 significant figures.

[2 marks]

| Leaf area   | Number of stomata |               |
|-------------|-------------------|---------------|
|             | Upper surface     | Lower surface |
| 1           | 3                 | 44            |
| 2           | 0                 | 41            |
| 3           | 1                 | 40            |
| 4           | 5                 | 42            |
| 5           | 1                 | 39            |
| <b>Mean</b> | <b>2</b>          | <b>X</b>      |

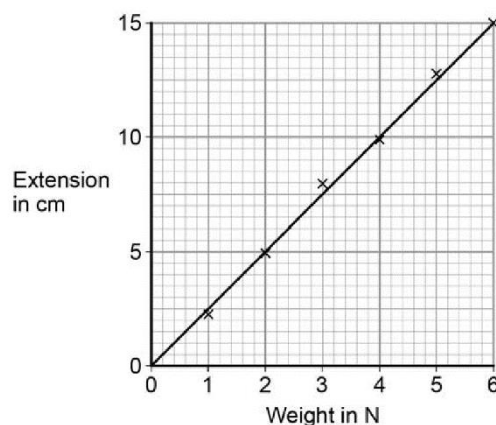
2. The student measured the extension of the spring using a range of weights.

The student's data is shown plotted as a graph in Figure 3.

What range of weight did the student use?

[1 mark]

Figure 3



1. The table shows information about the marks of 30 students in a test.

Students who scored less than the mean mark have to retake the test.

- (a.) How many students have to retake the test?

You must show your working.

| Mark       | Frequency |
|------------|-----------|
| 14         | 2         |
| 15         | 10        |
| 16         | 2         |
| 17         | 3         |
| 18         | 13        |
| Total = 30 |           |

.....[3 marks]

- (b.) What is the range of marks?

.....[1 mark]

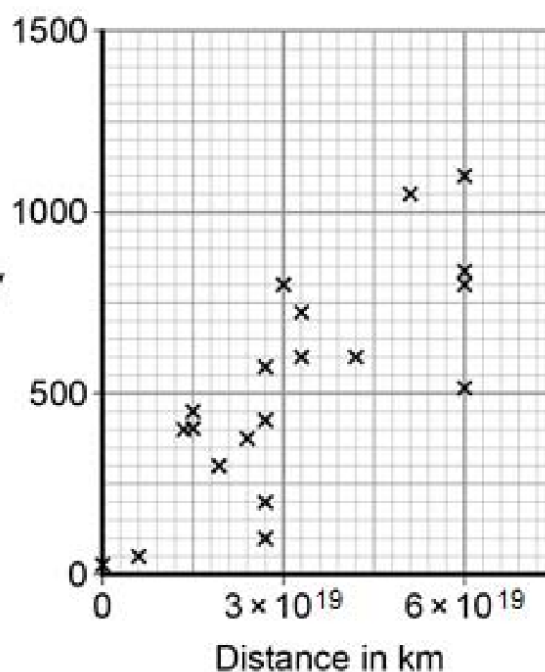
3. From his observations, Hubble was able to calculate the speed of a galaxy and the distance of the galaxy from the Earth.

Figure 5 shows the results of Hubble's calculations.

**Figure 5**

What relationship between the speed of a galaxy and the distance is suggested by Hubble's results?

Speed of galaxy away from Earth in km/s



[1 mark]

3. The scatter diagram shows information about 10 students.

For each student, it shows the number of hours spent revising and the mark the student achieved in a Spanish test.

One of the points is an outlier.

- (a) Write down the coordinates of the outlier.

.....

[1 mark]

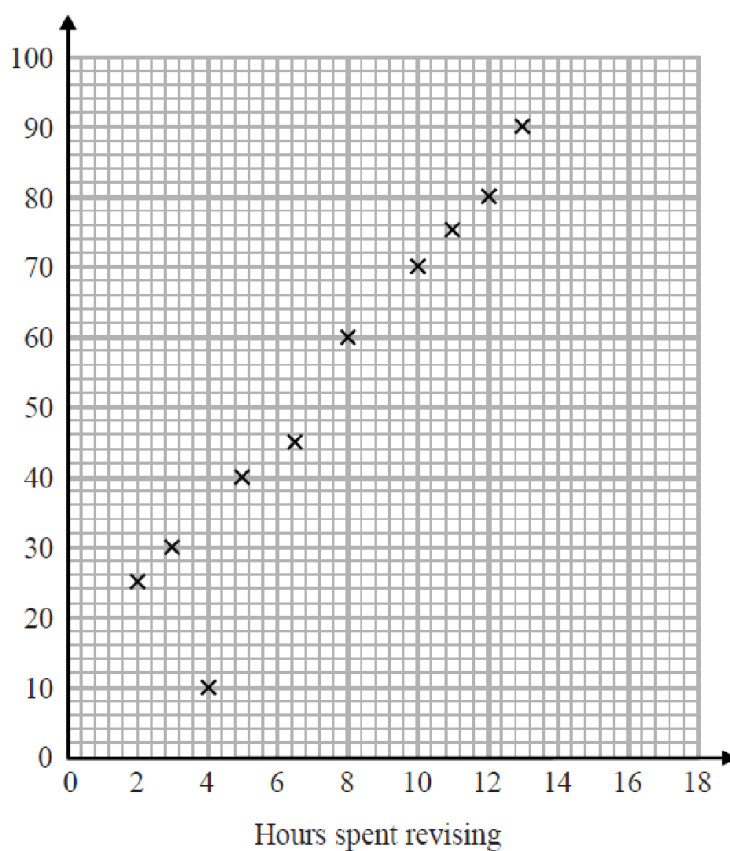
- (b) For all the other points

- (i) draw the line of best fit,

- (ii) describe the correlation.

..... [2 marks]

Mark



4. Calculate the percentage (%) decrease in the number of seals caught from 2004 to 2010.

| Year | Number of seals caught in thousands |
|------|-------------------------------------|
| 2004 | 362                                 |
| 2005 | 316                                 |
| 2006 | 348                                 |
| 2007 | 224                                 |
| 2008 | 215                                 |
| 2009 | 91                                  |
| 2010 | 67                                  |

Decrease in seals = .....%

[2 marks]

4. In 1999 the minimum wage for adults was £3.60 per hour. In 2013 it was £6.31 per hour.  
Work out the percentage increase in the minimum wage.

\_\_\_\_\_ % [3 marks]

5. A coarse particle has a diameter of  $1 \times 10^{-6}$  m.  
A nanoparticle has a diameter of  $1.6 \times 10^{-9}$  m.  
Calculate how many times bigger the diameter of the coarse particle is than the diameter of the nanoparticle.

[2 marks]

5. During an experiment, a scientist notices that the number of bacteria halves every second.  
There were  $2.3 \times 10^{30}$  bacteria at the start of the experiment.  
Calculate how many bacteria were left after 5 seconds.  
Give your answer in standard form correct to two significant figures.

[2 marks]

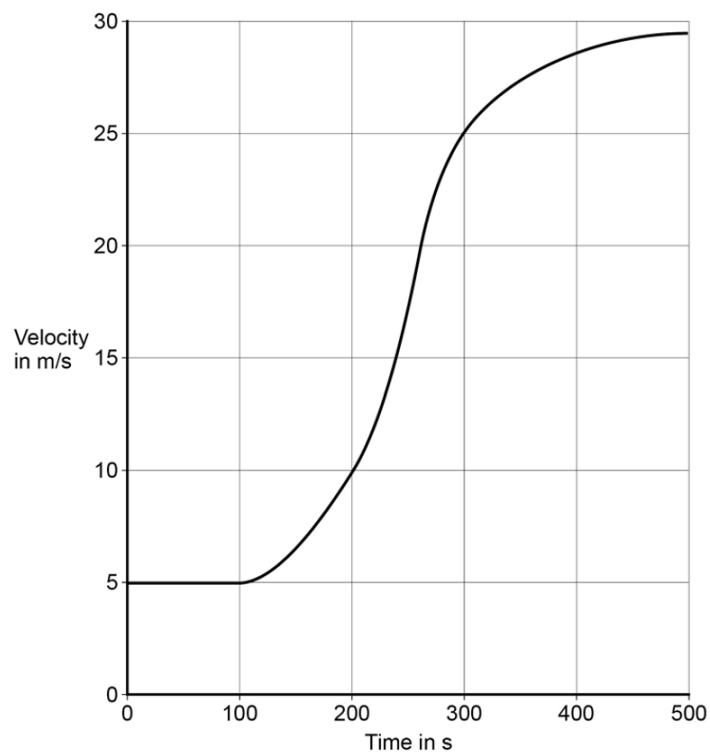
6. Figure 15 shows how the velocity of the train changes with time as the train travels along a straight section of the journey.

Estimate the distance travelled by the train along the section of the journey shown in Figure 15.

To gain full marks you must show how you worked out your answer.

Figure 15

[3 marks]



6. Here is a speed-time graph for a car.

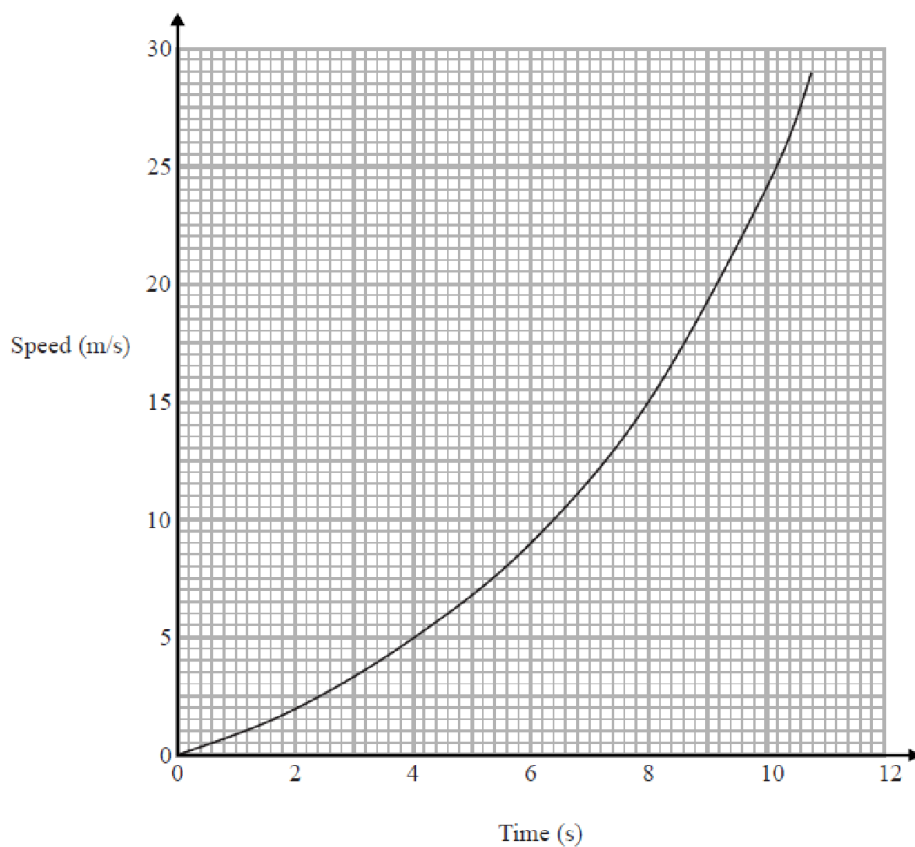
- a) Work out an estimate for the distance the car travelled in the first 10 seconds.  
Use 5 strips of equal width.

.....m

[3 marks]

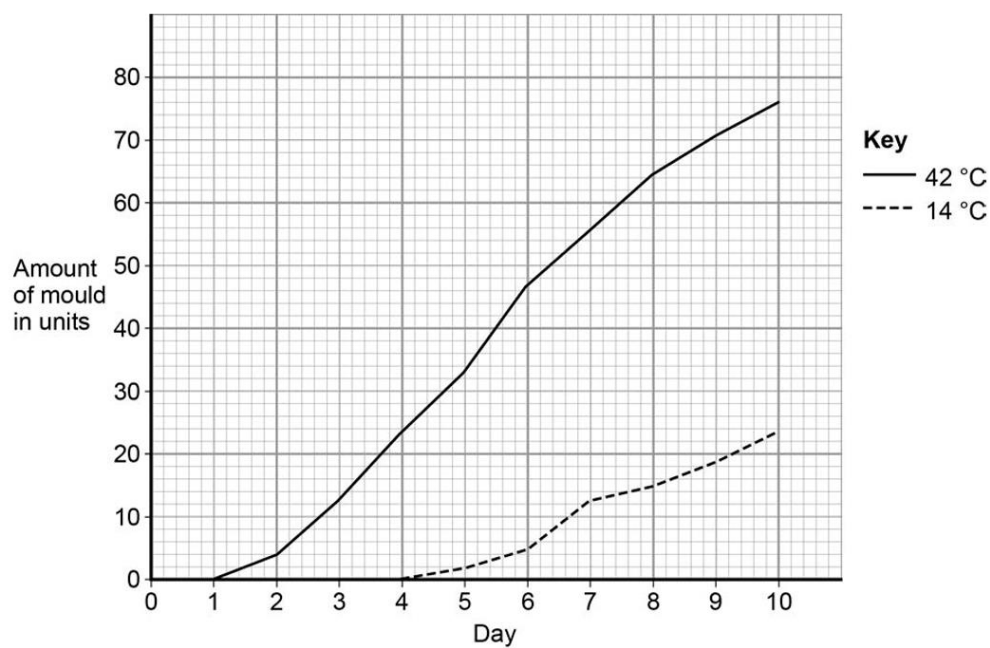
- b) Is your answer to (a) an underestimate or an overestimate of the actual distance?

Give a reason for your answer.



[1 mark]

7. Determine the rate of mould growth at 42 °C between day 2 and day 7.



Rate of mould growth = .....units per day

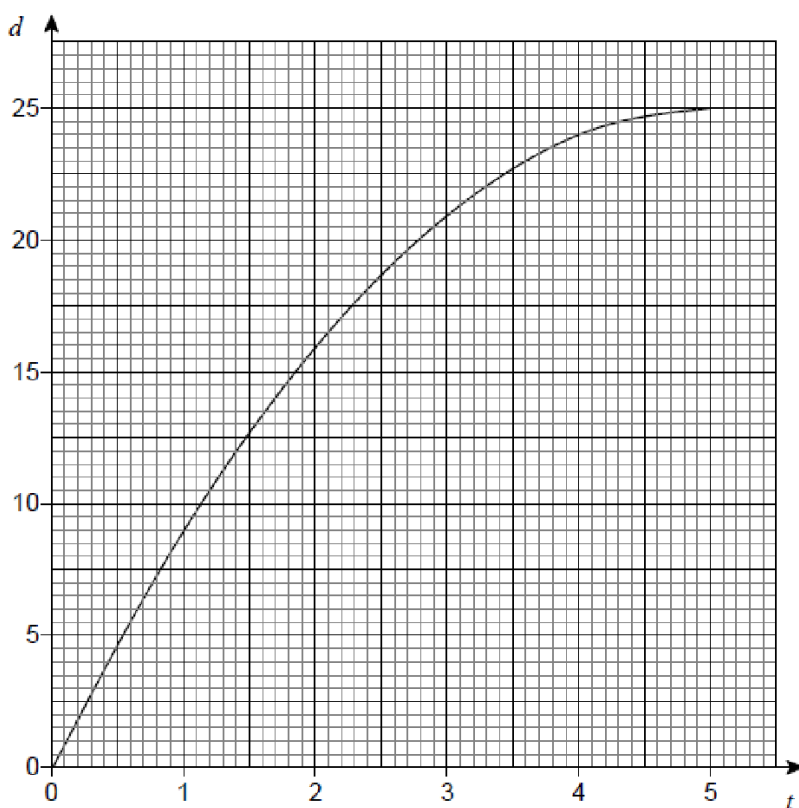
[2 marks]

7. A container is filled with water in 5 seconds.

The graph shows the depth of water,  $d$  cm, at time  $t$  seconds.

Use the graph to estimate the rate at which the depth of water is increasing at 3 seconds.

You must show your working.



[2 marks]

**Maths in Science: Use your calculator to answer these questions**

1.  $\frac{5}{3} + \frac{3}{4} =$

2.  $2\frac{2}{3} - \frac{3}{5} =$

3. Express 2 hours and 12 minutes as a decimal number of hours

4. Express 1 hour and 17 minutes as a decimal number of hours

5. Multiply  $3.7 \times 10^4$  by  $1.81 \times 10^7$

6.  $\frac{3.4 \times 10^5}{2.1 \times 10^3} =$

7. The mean distance the ruler was dropped is 116 mm.  
Calculate the mean reaction time.

Use the equation:  $\text{reaction time in s} = \sqrt{\frac{\text{mean drop distance in cm}}{490}}$

Give your answer to 3 significant figures.

Mean reaction time = ..... [3 marks]

8. A coarse particle has a diameter of  $1 \times 10^{-6}$  m.  
A nanoparticle has a diameter of  $1.6 \times 10^{-9}$  m.

Calculate how many times bigger the diameter of the coarse particle is than the diameter of the nanoparticle.

..... [2 marks]

9.

|  |                    |
|--|--------------------|
| Population of UK in 2015                             | $6.5 \times 10^7$  |
| Number of people diagnosed with diabetes             | $3.45 \times 10^6$ |
| Estimated number of people with undiagnosed diabetes | $5.49 \times 10^5$ |

Calculate the percentage (%) of the UK population estimated to have diabetes.  
You should include both diagnosed and undiagnosed people in your calculation.  
Give your answer to 2 significant figures.

Estimated percentage of population with diabetes = .....% [3 marks]